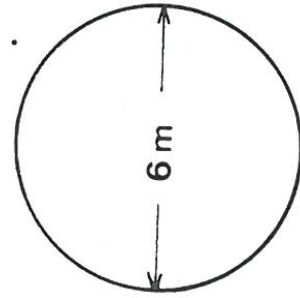
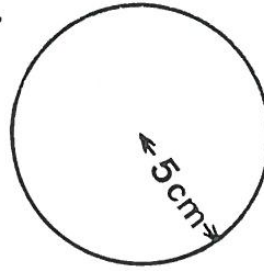
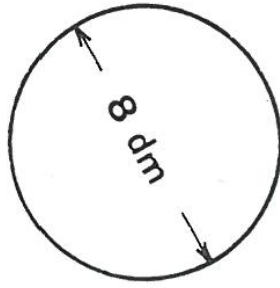


Le cercle (exercices)

Calcule la circonférence

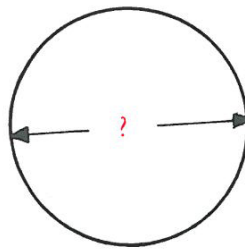


.....

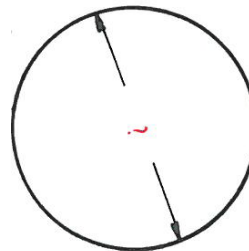
.....

.....

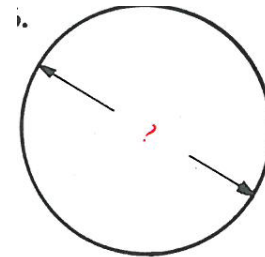
Calcule le diamètre



Circ. : 25,12 cm.



Circ. : 47,1 cm.



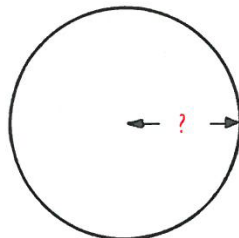
Circ. : 157 m.

.....

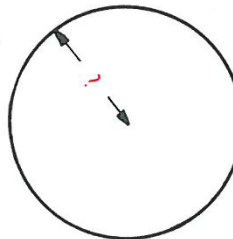
.....

.....

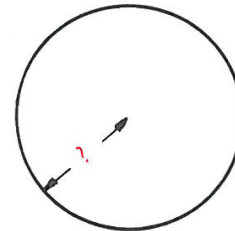
Calcule le rayon



Circ. : 94,2 cm.



Circ. : 7,85 m.

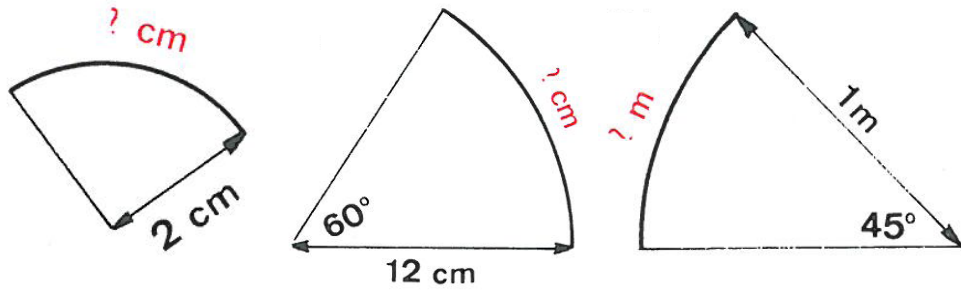


Circ. : 408,2 cm.

.....

.....

.....

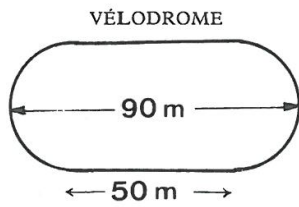


.....

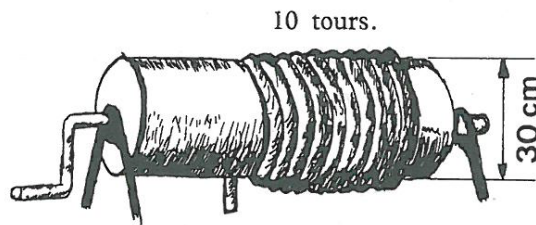
.....

.....

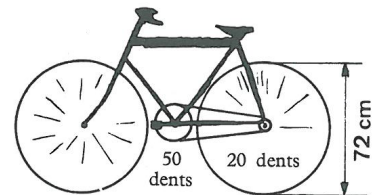
Défis



Distance parcourue après
50 tours de piste?



Longueur du cable?



Distance parcourue par tour
de pédale?

.....

.....

.....

.....

.....

.....